



Nombre:

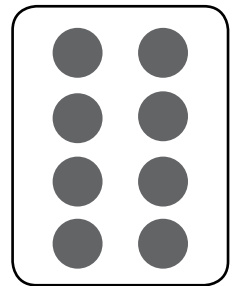




Sección:

Fecha:

Taxonomía / Inteligencias múltiples  
aplicar / lógico - matemático

## Secuencia numérica

1. Ordena las tarjetas de mayor a menor. Dibújalas en el espacio.










Nombre:

Sección:

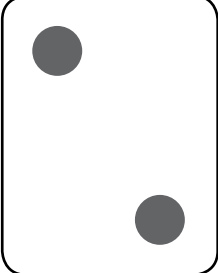

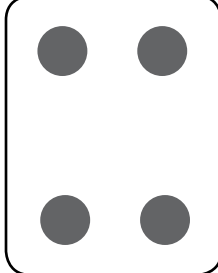


Fecha:

Taxonomía / Inteligencias múltiples  
aplicar / lógico - matemático

2. Añade 3 puntos a la tarjeta A y 2 puntos a la tarjeta D. Ordénalas de mayor a menor.

<b>A</b>	<b>B</b>	<b>C</b>	<b>D</b>	<b>E</b>
				
_____	_____	_____	_____	_____

3. Encuentra la secuencia. Ordena las tarjetas de mayor a menor. Dibújalas en el espacio.

				
---	---	---	--	---