



Nombre: \_\_\_\_\_

Sección: \_\_\_\_\_

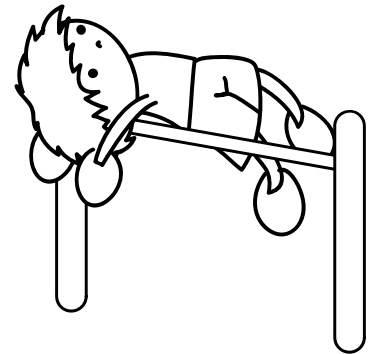
Fecha: \_\_\_\_\_

Taxonomía / Inteligencias múltiples  
recordar / lógico – matemático

**¡Es muy fácil la adición!**  
Adición con dos sumandos de un dígito

1. Calcula cada adición.

$\begin{array}{r} 9 \\ + 0 \\ \hline \end{array}$	$\begin{array}{r} 9 \\ + 1 \\ \hline \end{array}$	$\begin{array}{r} 9 \\ + 2 \\ \hline \end{array}$	$\begin{array}{r} 9 \\ + 3 \\ \hline \end{array}$
---	---	---	---



$\begin{array}{r} 9 \\ + 4 \\ \hline \end{array}$	$\begin{array}{r} 9 \\ + 5 \\ \hline \end{array}$	$\begin{array}{r} 9 \\ + 6 \\ \hline \end{array}$	$\begin{array}{r} 9 \\ + 7 \\ \hline \end{array}$	$\begin{array}{r} 9 \\ + 8 \\ \hline \end{array}$	$\begin{array}{r} 9 \\ + 9 \\ \hline \end{array}$
---	---	---	---	---	---

$\begin{array}{r} 7 \\ + 9 \\ \hline \end{array}$	$\begin{array}{r} 8 \\ + 3 \\ \hline \end{array}$	$\begin{array}{r} 6 \\ + 8 \\ \hline \end{array}$	$\begin{array}{r} 3 \\ + 7 \\ \hline \end{array}$	$\begin{array}{r} 6 \\ + 9 \\ \hline \end{array}$	$\begin{array}{r} 5 \\ + 8 \\ \hline \end{array}$
---	---	---	---	---	---

$\begin{array}{r} 5 \\ + 9 \\ \hline \end{array}$	$\begin{array}{r} 4 \\ + 6 \\ \hline \end{array}$	$\begin{array}{r} 8 \\ + 9 \\ \hline \end{array}$	$\begin{array}{r} 7 \\ + 6 \\ \hline \end{array}$	$\begin{array}{r} 8 \\ + 7 \\ \hline \end{array}$	$\begin{array}{r} 3 \\ + 9 \\ \hline \end{array}$
---	---	---	---	---	---

$\begin{array}{r} 6 \\ + 5 \\ \hline \end{array}$	$\begin{array}{r} 7 \\ + 8 \\ \hline \end{array}$	$\begin{array}{r} 8 \\ + 2 \\ \hline \end{array}$	$\begin{array}{r} 4 \\ + 8 \\ \hline \end{array}$	$\begin{array}{r} 2 \\ + 7 \\ \hline \end{array}$	$\begin{array}{r} 8 \\ + 6 \\ \hline \end{array}$
---	---	---	---	---	---



Nombre: \_\_\_\_\_



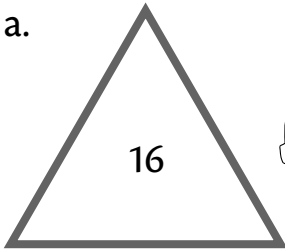
Sección: \_\_\_\_\_

Fecha: \_\_\_\_\_

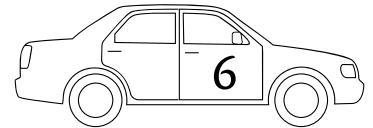


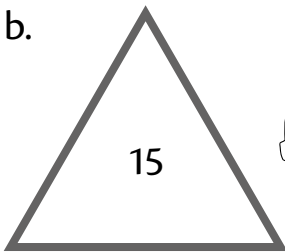
Taxonomía / Inteligencias múltiples  
recordar / lógico – matemático

2. Encierra los carritos que tienen los sumandos que corresponden a la suma que está en el triángulo.

a.



b.



c.

