



Nombre:

Sección:

Fecha:

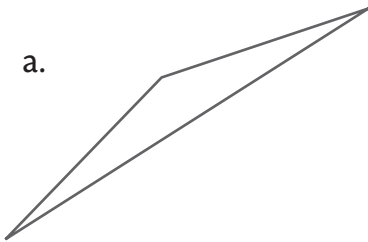
Taxonomía / Inteligencias múltiples  
recordar / lógico – matemático

**Cada triángulo con su nombre**  
Clasificación de triángulos por sus ángulos

En la parte inferior de cada triángulo, escribe si es rectángulo, acutángulo u obtusángulo.

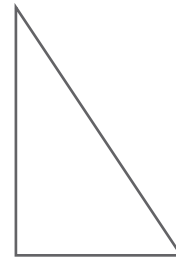
1.

a.




---

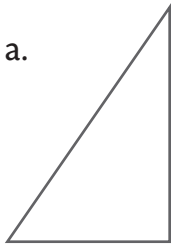
b.




---


2.

a.




---

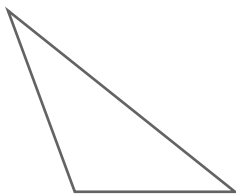
b.




---

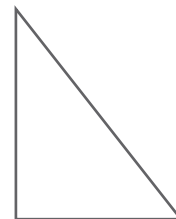
3.

a.




---

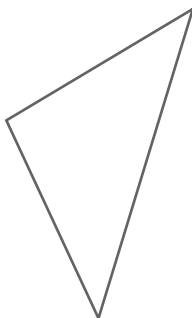
b.




---

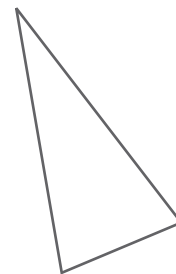
4.

a.




---

b.




---