



Nombre:

Sección:

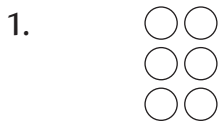
Fecha:

Taxonomía / Inteligencias múltiples
aplicar / visual - lógico - matemático


Matrices

La multiplicación


Escribe las multiplicaciones que corresponden a cada matriz.



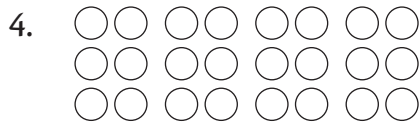
$$\square \times \square = \square$$




$$\square \times \square = \square$$



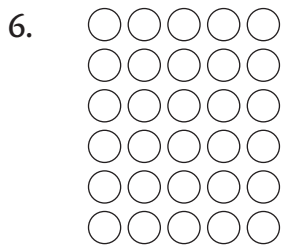
$$\square \times \square = \square$$




$$\square \times \square = \square$$



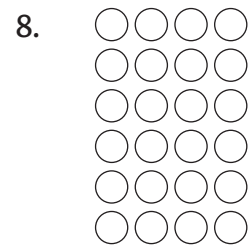
$$\square \times \square = \square$$



$$\square \times \square = \square$$



$$\square \times \square = \square$$



$$\square \times \square = \square$$