



Nombre: _____

Sección: _____

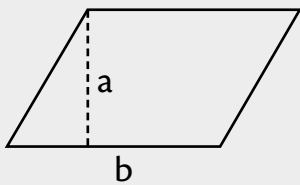
Fecha: _____

Taxonomía / Inteligencias múltiples
recordar / lógico – matemático

La práctica da la experiencia

Área del romboide y del rombo

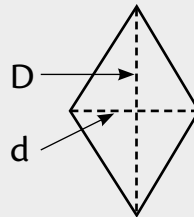
Área del romboide y del rombo



b: base

a: altura

$$\text{Área} = b \times a$$

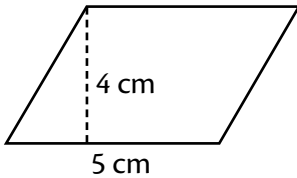


D: diagonal mayor

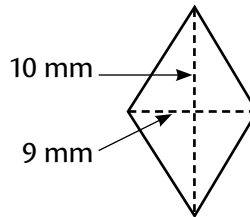
d: diagonal menor

$$\text{Área} = \frac{D \times d}{2}$$

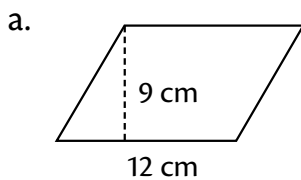
Calcula el área. Observa los ejemplos.



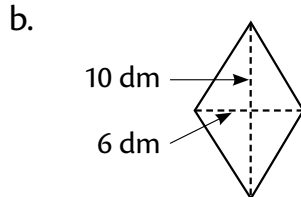
$$5 \times 4 = 20 \quad A = 20 \text{ cm}^2$$



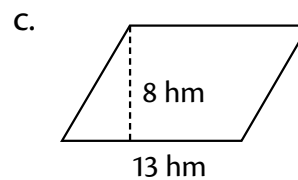
$$\frac{10 \times 9}{2} = 45 \quad A = 45 \text{ mm}^2$$



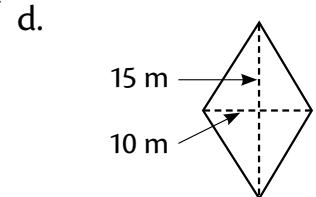
A = _____



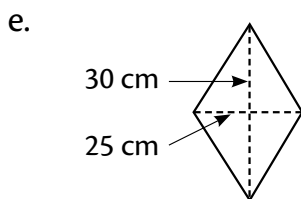
A = _____



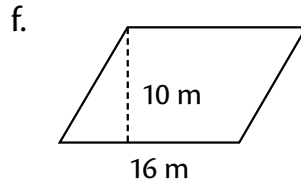
A = _____



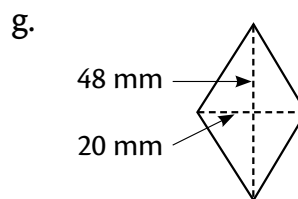
A = _____



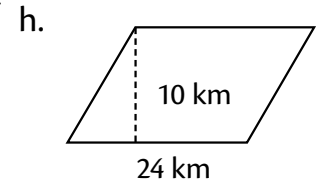
A = _____



A = _____



A = _____



A = _____